


Name: \_\_\_\_\_

**What Time Is It?**

Write the time shown below each clock.


Created on TheTeachersCorner.net Time Worksheet Maker



1.



2.




3.



4.



5.




6.




7.




8.




9.



10.



11.




12.

Name: \_\_\_\_\_

**What Time Is It? - KEY**

Write the time shown below each clock.


Created on TheTeachersCorner.net [Time Worksheet Maker](#)



1. 07:10




2. 07:40




3. 06:45




4. 12:15




5. 12:00




6. 01:30




7. 03:15




8. 03:30




9. 12:00



10. 05:00



11. 07:30



12. 09:30